


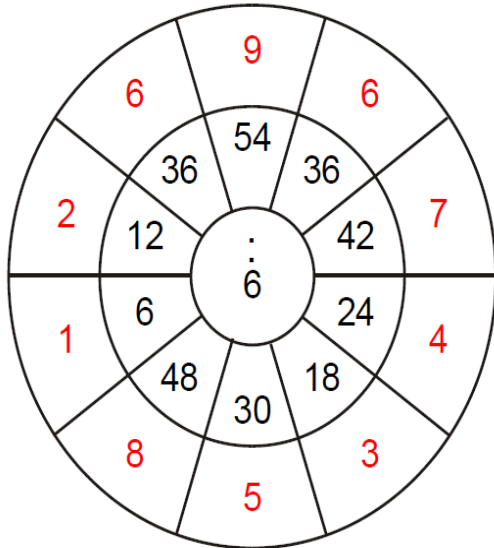
| x | 8 | 7 | 2 | 10 | 9 | 1 | 6 | 5 | 4 | 3 | 11 | 12 |
|----|----|----|----|-----|-----|----|----|----|----|----|-----|-----|
| 1 | 8 | 7 | 2 | 10 | 9 | 1 | 6 | 5 | 4 | 3 | 11 | 12 |
| 2 | 16 | 14 | 4 | 20 | 18 | 2 | 12 | 10 | 8 | 6 | 22 | 24 |
| 3 | 24 | 21 | 6 | 30 | 27 | 3 | 18 | 15 | 12 | 9 | 33 | 36 |
| 4 | 32 | 28 | 8 | 40 | 36 | 4 | 24 | 20 | 16 | 12 | 44 | 48 |
| 5 | 40 | 35 | 10 | 50 | 45 | 5 | 30 | 25 | 20 | 15 | 55 | 60 |
| 6 | 48 | 42 | 12 | 60 | 54 | 6 | 36 | 30 | 24 | 18 | 66 | 72 |
| 7 | 56 | 49 | 14 | 70 | 63 | 7 | 42 | 35 | 28 | 21 | 77 | 84 |
| 8 | 64 | 56 | 16 | 80 | 72 | 8 | 48 | 40 | 32 | 24 | 88 | 96 |
| 9 | 72 | 63 | 18 | 90 | 81 | 9 | 54 | 45 | 36 | 27 | 99 | 108 |
| 10 | 80 | 70 | 20 | 100 | 90 | 10 | 60 | 50 | 40 | 30 | 110 | 120 |
| 11 | 88 | 77 | 22 | 110 | 99 | 11 | 66 | 55 | 44 | 33 | 121 | 132 |
| 12 | 96 | 84 | 24 | 120 | 108 | 12 | 72 | 60 | 48 | 36 | 132 | 144 |

ΕΛΕΓΧΩ ΤΙΣ ΠΡΑΞΕΙΣ ΠΡΟΣΕΚΤΙΚΑ!!!

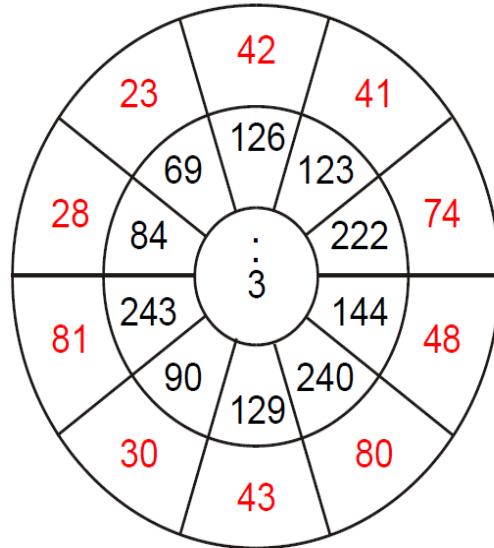


ΕΞΑΣΚΟΥΜΑΙ ΣΤΗ ΔΙΑΙΡΕΣΗ

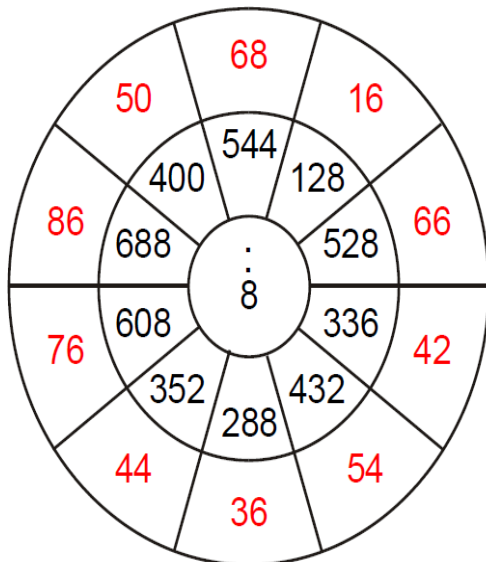
①



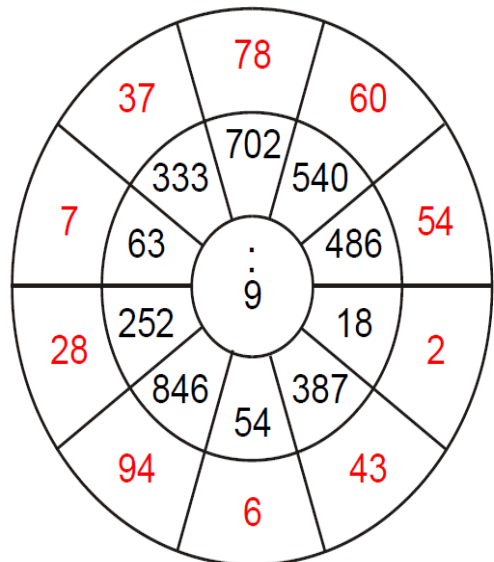
②




③



④



ΕΛΕΓΧΩ ΤΙΣ ΠΡΑΞΕΙΣ ΠΡΟΣΕΚΤΙΚΑ!!!



Νοερές Πράξεις Πρόσθεσης Αφαίρεσης - Αλγόριθμοι Πρόσθεσης Αφαίρεσης

1. Να υπολογίσεις το αποτέλεσμα.

$$\begin{array}{r} 358 \\ +237 \\ \hline 595 \end{array}$$

$$\begin{array}{r} 446 \\ +383 \\ \hline 829 \end{array}$$

$$\begin{array}{r} 486 \\ +178 \\ \hline 664 \end{array}$$

$$\begin{array}{r} 659 \\ - 436 \\ \hline 223 \end{array}$$

$$\begin{array}{r} 687 \\ - 459 \\ \hline 228 \end{array}$$

$$\begin{array}{r} 196 \\ - 147 \\ \hline 49 \end{array}$$

$$\begin{array}{r} 857 \\ - 484 \\ \hline 373 \end{array}$$

$$\begin{array}{r} 800 \\ - 167 \\ \hline 633 \end{array}$$

$$\begin{array}{r} 436 \\ + 238 \\ \hline 674 \end{array}$$

$$\begin{array}{r} 661 \\ - 345 \\ \hline 316 \end{array}$$

$125 + 54 = 179$

$315 - 116 = 199$

$76 - 38 = 38$

$103 + 37 = 140$

$81 - 29 = 52$

$715 - 109 = 606$

$412 + 35 + 118 = 565$

$435 + 114 + 65 = 614$







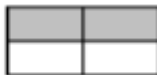

















$567 + 132 = 699$

2. Να χρησιμοποιήσεις τη μαθηματική πρόταση που σου δίνεται, για να συμπληρώσεις τα κενά.











| | |
|-------------------|-------------------|
| $145 + 356 = 501$ | $946 - 389 = 557$ |
| $145 + 396 = 541$ | $946 - 394 = 552$ |
| $125 + 356 = 481$ | $946 - 289 = 657$ |
| $155 + 336 = 491$ | $926 - 379 = 547$ |

ΕΙΣΑΓΩΓΗ ΣΤΑ ΚΛΑΣΜΑΤΑ

1. Γράψε το σωστό κλάσμα.

| | | | | | | | |
|---|---------------|---|---------------|---|----------------|---|----------------|
|  | $\frac{2}{3}$ |  | $\frac{3}{4}$ |  | $\frac{1}{2}$ |  | $\frac{1}{4}$ |
|  | $\frac{3}{5}$ |  | $\frac{1}{5}$ |  | $\frac{2}{4}$ |  | $\frac{3}{6}$ |
|  | $\frac{1}{6}$ |  | $\frac{1}{3}$ |  | $\frac{5}{8}$ |  | $\frac{1}{10}$ |
|  | $\frac{2}{4}$ |  | $\frac{4}{5}$ |  | $\frac{9}{10}$ |  | $\frac{3}{10}$ |
|  | $\frac{2}{6}$ |  | $\frac{4}{5}$ |  | $\frac{8}{10}$ |  | $\frac{5}{10}$ |
|  | $\frac{2}{6}$ |  | $\frac{1}{2}$ |  | $\frac{6}{10}$ |  | $\frac{7}{10}$ |

2. Χρωμάτισε όσα λέει το κλάσμα.

| | | | |
|---|---------------|---|---------------|
|  | $\frac{1}{3}$ |  | $\frac{1}{4}$ |
|  | $\frac{4}{5}$ |  | $\frac{2}{5}$ |
|  | $\frac{2}{6}$ |  | $\frac{2}{3}$ |
|  | $\frac{2}{4}$ |  | $\frac{3}{5}$ |
|  | $\frac{3}{6}$ |  | $\frac{1}{2}$ |